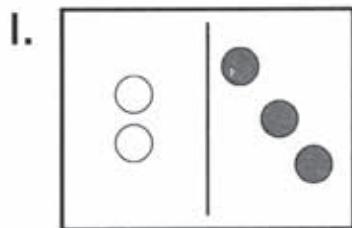


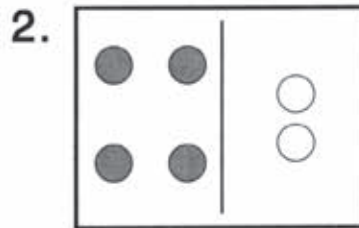
Using Counters to Add

Add to find the sum.

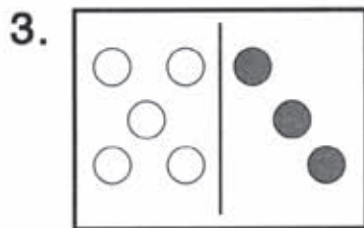
Use counters if you like.




2 and 3 is 5.



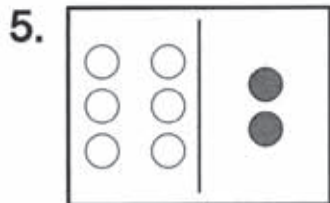
_____ and _____ is _____.




_____ and _____ is _____.



_____ and _____ is _____.



_____ and _____ is _____.



_____ and _____ is _____.

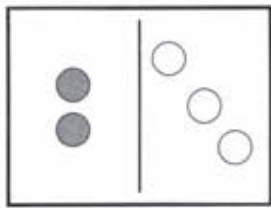
Problem Solving Reasoning



7. Is the sum of 3 and 3 more or less than 7? _____

Using Counters to Add

Join the parts to make the whole.




How many black counters? 2

How many white counters? 3

2 and 3 is 5 in all. 5 is the sum of 2 and 3.

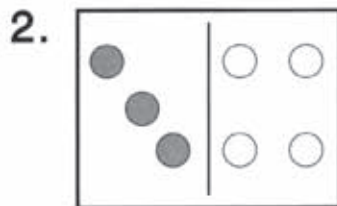
Add to find the sum. Use counters if you like.



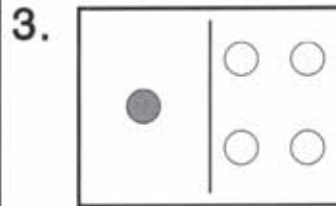
How many black counters? 4

How many white counters? 2

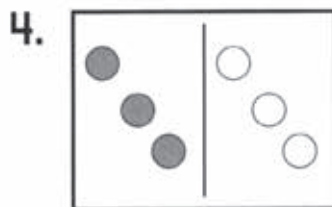
4 and 2 is 6 in all. 6 is the sum of 4 and 2.



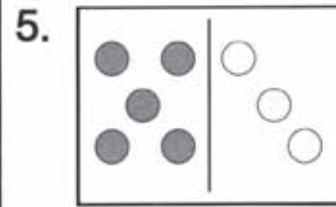
_____ and _____ is _____ in all.



_____ and _____ is _____ in all.



_____ and _____ is _____ in all.



_____ and _____ is _____ in all.