

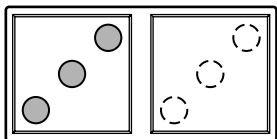
Doubles Facts to 18

R 2-2

Find $3 + 3$.

Draw 3 more dots to show the double.

Then write the addition sentence.

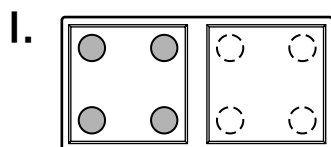


$3 + 3 = 6$ is a **doubles fact**.
Both addends are the same.

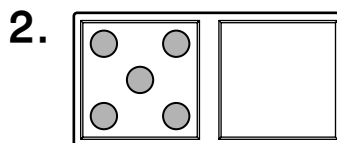
3 + 3 = 6

Draw dots on the domino to show the double.

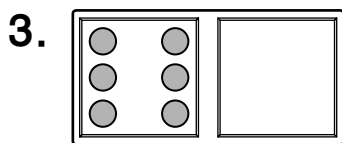
Then write the addition sentence.



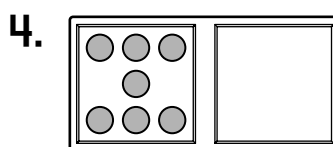
$4 + 4 = 8$



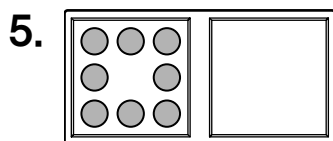
$5 + \underline{\quad} = \underline{\quad}$



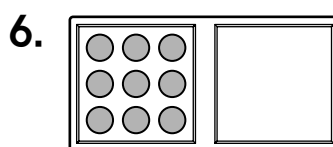
$\underline{\quad} + \underline{\quad} = \underline{\quad}$



$\underline{\quad} + \underline{\quad} = \underline{\quad}$



$\underline{\quad} + \underline{\quad} = \underline{\quad}$



$\underline{\quad} + \underline{\quad} = \underline{\quad}$