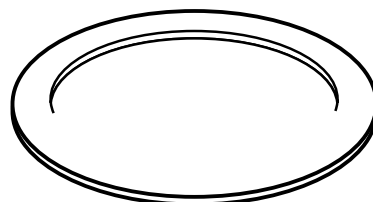
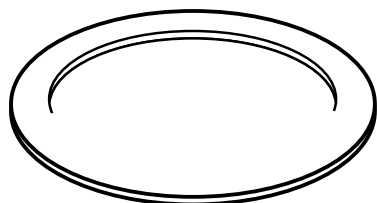



Double Up

E 2-2
VISUAL THINKING




Solve the problem. Then write the addition fact.

1. Jacob wants to put the same number of apples on each platter. He has 8 apples. Draw the apples Jacob will put on each platter.



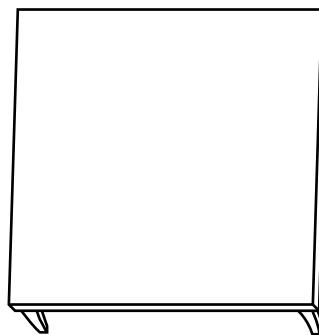

$$\underline{\quad\quad} + \underline{\quad\quad} = \underline{\quad\quad}$$

2. Luz wants to put the same number of flowers in each flower box. She has 12 flowers. Draw the flowers Luz will put in each box.



$$\underline{\quad\quad} + \underline{\quad\quad} = \underline{\quad\quad}$$

3. Elena wants to put the same number of cups on each table. She has 10 cups. Draw the cups Elena will put on each table.



$$\underline{\quad\quad} + \underline{\quad\quad} = \underline{\quad\quad}$$