

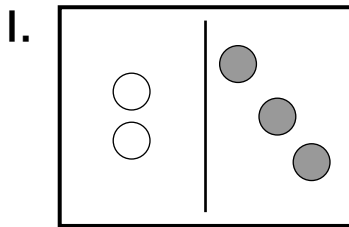
Name _____

Using Counters to Add

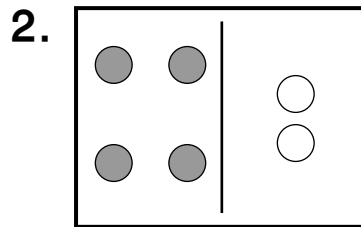
P 2-2

Add to find the sum.

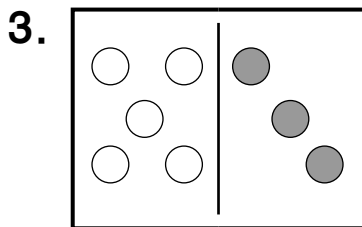
Use counters if you like.



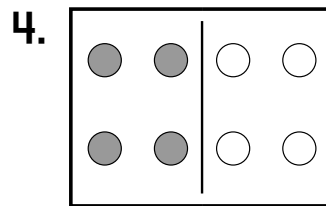
2 and 3 is 5.



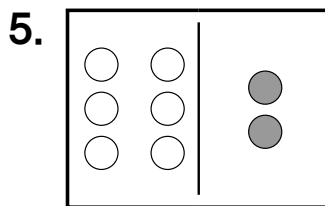
_____ and _____ is _____.



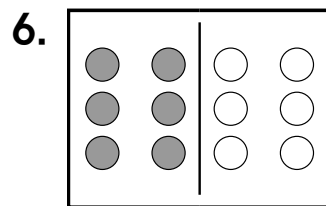
_____ and _____ is _____.



_____ and _____ is _____.





_____ and _____ is _____.



_____ and _____ is _____.

Problem Solving Reasoning



7. Is the sum of 3 and 3 more or less than 7? _____